

# 数値推理パズル

## 目次

問題1 □の数値を推理せよ。

(1-1) 1, 2, 4, 8, 16, 32, 64, □

(1-2) 1, 4, 9, 16, 25, 36, 49, 64, □

(1-3) 1, 3, 6, 10, 15, 21, 28, 36, □

(1-4) 1, 2, 6, 24, 120, 720, 5040, □

(2-1) 1, 1, 2, 3, 5, 8, 13, 21, 34, □

(2-2) 2, 3, 6, 18, 108, 1944, □

(3-1) 2, 3, 5, 7, 11, 13, 17, 19, □

(3-2) 5, 8, 12, 18, 24, 30, □

(3-3) 6, 15, 35, 77, 143, 221, □

(4-1) 5, 7, 1, 4, 2, 8, 5, 7, 1, 4, □

(4-2) 5, 6, 1, 7, 8, 5, 3, 8, □

問題2 □の数値を推察せよ。

(1-1), (1-2), (1-3), (1-4)

(2-1), (2-2)

<<図省略>>

問題3 □の数値を推察せよ。

(1), (2), (3), (4), (5)

<<図省略>>

問題 4 □の数値を推察せよ。

(1), (2), (3)

<< 図省略 >>

問題 5 □の数値を推察せよ。

(1 - 1), (1 - 2),  
(2 - 1), (2 - 2),  
(3 - 1), (3 - 2),  
(4 - 1), (4 - 2)

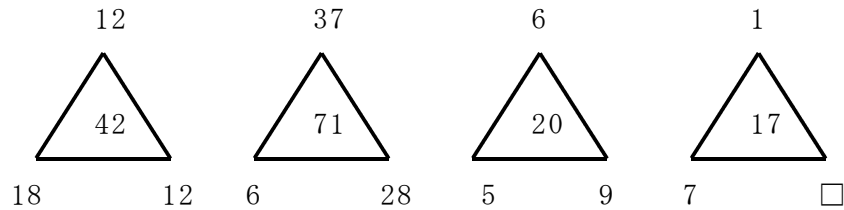
<< 図省略 >>

問題 1 □の数值を推理せよ。

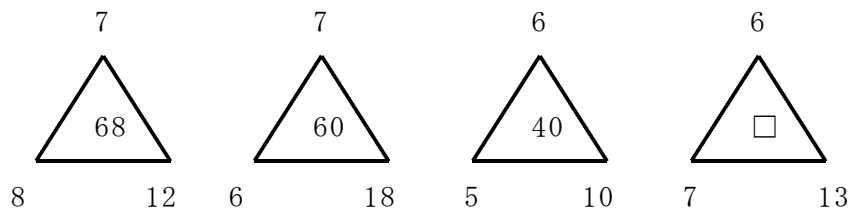
- (1-1) 1, 2, 4, 8, 16, 32, 64, □
- (1-2) 1, 4, 9, 16, 25, 36, 49, 64, □
- (1-3) 1, 3, 6, 10, 15, 21, 28, 36, □
- (1-4) 1, 2, 6, 24, 120, 720, 5040, □
- (2-1) 1, 1, 2, 3, 5, 8, 13, 21, 34, □
- (2-2) 2, 3, 6, 18, 108, 1944, □
- (3-1) 2, 3, 5, 7, 11, 13, 17, 19, □
- (3-2) 5, 8, 12, 18, 24, 30, □
- (3-3) 6, 15, 35, 77, 143, 221, □
- (4-1) 5, 7, 1, 4, 2, 8, 5, 7, 1, 4, □
- (4-2) 5, 6, 1, 7, 8, 5, 3, 8, □

問題 2 □の数值を推察せよ。

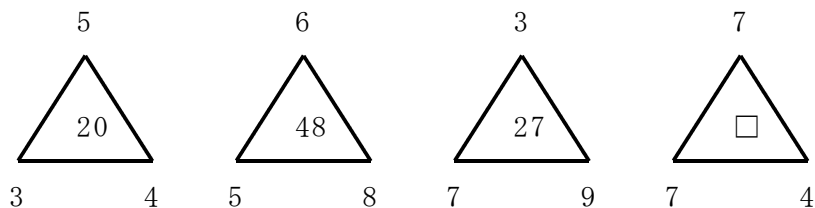
(1-1)



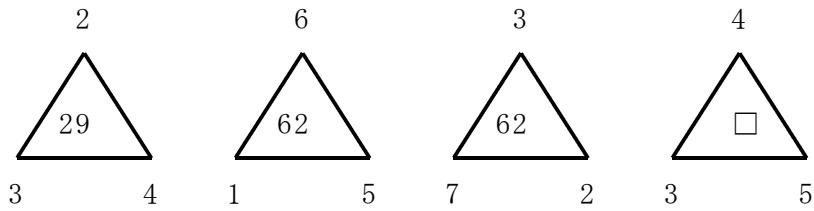
(1-2)



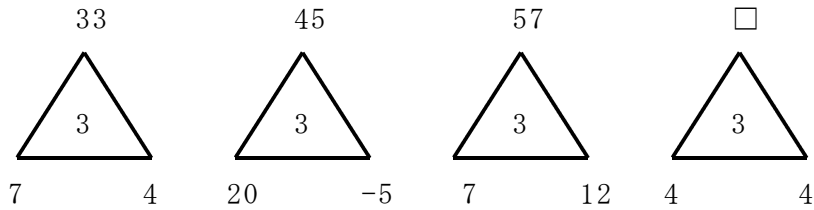
(1-3)



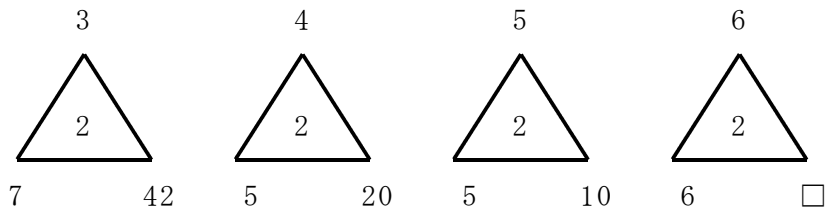
(1 - 4)



(2 - 1)

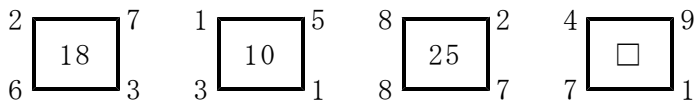


(2 - 2)

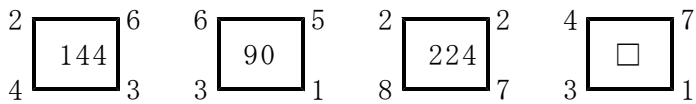


**問題 3** □の数値を推察せよ。

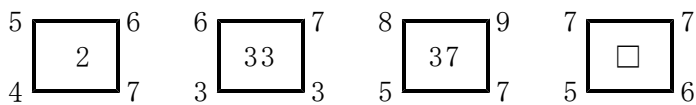
(1)



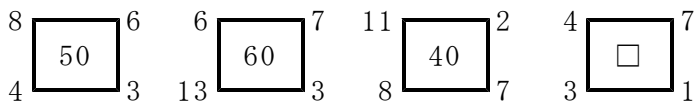
(2)



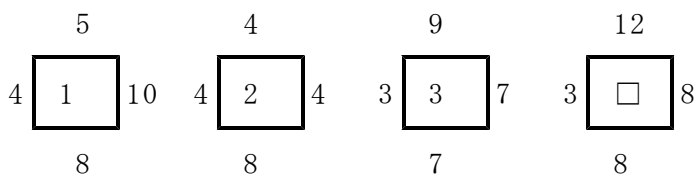
(3)



(4)



(5)



問題 4 □の数値を推察せよ。

(1)

	67	
55	1	34
	45	

	38	
72	4	87
	49	

	28	
63	0	57
	22	

	33	
57	□	57
	25	

(2)

	67	
49	13	58
	94	

	86	
77	14	68
	59	

	28	
64	10	55
	73	

	74	
83	□	29
	65	

(3)

	83	
9	21	48
	55	

	26	
45	18	72
	28	

	17	
24	15	63
	34	

	33	
51	□	95
	77	

問題 5 □の数値を推察せよ。

(1-1)

4	6	5	5
1	9	3	7
2	7	6	5
4	2	9	□

(1-2)

5	4	3	8
6	5	2	7
1	11	5	3
4	4	3	□

(2-1)

1	2	3	4
1	7	16	28
1	22	70	154
1	67	277	□

(2-2)

1	1	1	1
2	3	4	5
3	6	10	15
4	10	20	35
5	15	35	70
6	21	56	126
7	28	84	210
8	36	120	□

(3-1)

1	2	0	1	2
0	1	2	0	0
2	0	0	1	1
1	2	1	2	2
0	2	1	0	□

(3-2)

1	13	8	12	16	□	7	11	6	18
---	----	---	----	----	---	---	----	---	----

(4-1)

6	4	7	0	3	3	6
2	8	7	4	8	1	9
9	3	4	5	1	5	□

(4-2)

7	1	2	7	3	3	4
4	9	5	0	9	5	8
2	1	7	6	3	7	□